


## Entry 2: Recognise the names of simple 2D shapes including pentagons and hexagons Answers


1. Triangle



Square



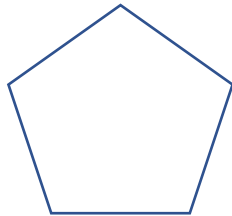
Circle



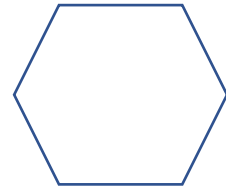
Rectangle



Pentagon



Hexagon



2. No, he is not right because not all sides of the rug are equal.

3. No, she is not right because this is a flat shape, a circle.