

Entry 2: Describe the properties of common 2D shapes including numbers of sides, corners and angles Answers


1. Write how many sides, corners and right angles each of the shapes below has.



Sides: 4

Corners: 4


Right angles: 4



Sides: 0

Corners: 0

Right angles: 0



Sides: 3

Corners: 3


Right angles: 0



Sides: 4

Corners: 4


Right angles: 4



Sides: 5

Corners: 5

Right angles: 0




Sides: 6

Corners: 6

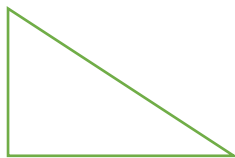
Right angles: 0

2. Square and rectangle

3.



✓



✓