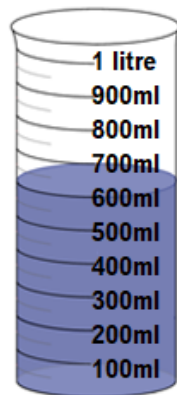


Entry 2: Read and use simple scales to the nearest labelled division Answers

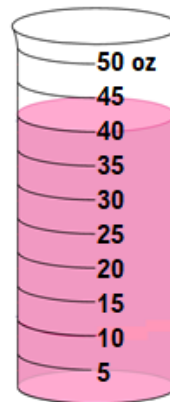
1. 8cm

No, the pen would not fit.

2.

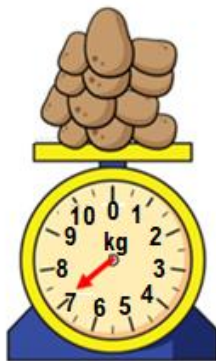


600 ml



40 oz

3.




7 kg

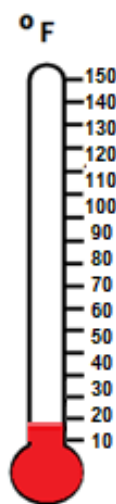


25 lbs

4.



25°C



20°F

5. b) About 250ml

6. 5kg

2 containers